



Up-to-date Questions and Answers from authentic resources to improve knowledge and pass the exam at very first attempt. ---- Guaranteed.



GRE-Quantitative MCQs
GRE-Quantitative TestPrep
GRE-Quantitative Study Guide
GRE-Quantitative Practice Test
GRE-Quantitative Exam Questions



killexams.com

Admission-Tests

GRE-Quantitative

Graduate Record Examination (Quantitative)

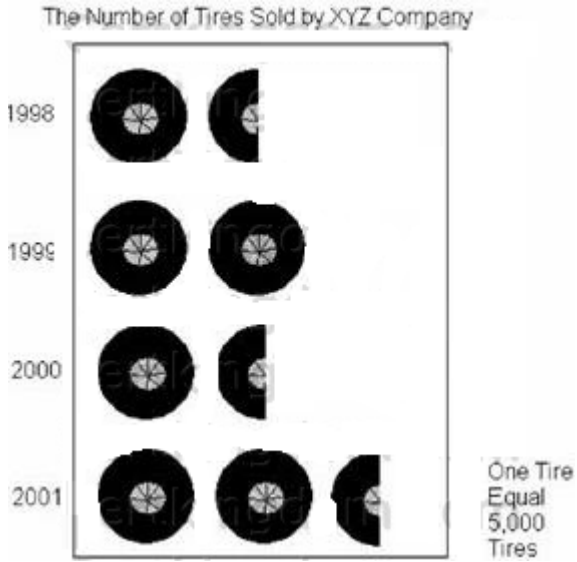
ORDER FULL VERSION

<https://killexams.com/pass4sure/exam-detail/GRE-Quantitative>



QUESTION: No: 402

Which two years were the least number of tires sold?




- A. 1998 and 1999
- B. 1998 and 2000
- C. 1998 and 2001
- D. 1999 and 2000
- E. 2000 and 2001

Answer: B

QUESTION: No: 403

Which of the following is a correct graph of $x > 1$, $x < 4$?



- A. Line A
- B. Line B
- C. Line C
- D. Line D
- E. Line E

Answer: A

QUESTION: No: 404

How much money did Jessica's budget allow for housing in April of 2001?



Jessica's Monthly Earnings from January 2001 to June 2001


January	\$2578
February	\$2432
March	\$2688
April	\$2480
May	\$2622
June	\$2555

- A. \$617.80
- B. \$620.92
- C. \$622.50
- D. \$626.38
- E. \$633.20

Answer: C

QUESTION: No: 405

Which of the following is the correct graph for $x \geq 3$ and $x \leq -2$

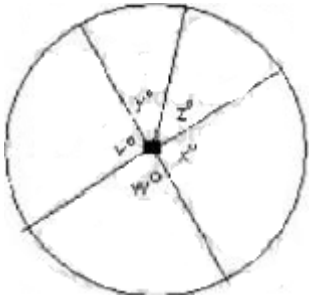


- A. Line A
- B. Line B
- C. Line C
- D. Line D
- E. Line E

Answer: D

QUESTION: No: 406

Column A -The average (arithmetic mean) of $v, w, y, x,$ and z



- A. if the quantity in Column A is greater
- B. if the quantity in Column B is greater
- C. if the two quantities are equal
- D. if it is impossible to determine which quantity is greater

Answer: A

QUESTION: No: 407

The shaded are in the below figure is 65% of the are of the entire circle, what is the value of d ?

Column A - d
Column B - 126 degrees

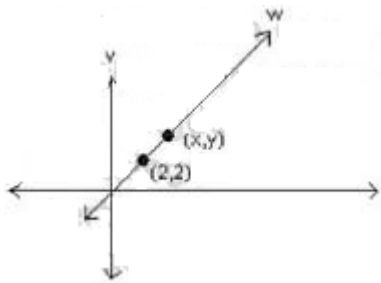


- A. if the quantity in Column A is greater
- B. if the quantity in Column B is greater
- C. if the two quantities are equal
- D. if it is impossible to determine which quantity is greater

Answer: C

QUESTION: No: 408

Column A - $(x-y)$
Column B - 0

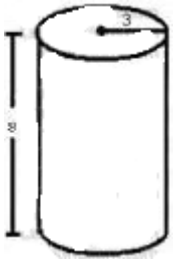


- A. if the quantity in Column A is greater
- B. if the quantity in Column B is greater
- C. if the two quantities are equal
- D. if it is impossible to determine which quantity is greater

Answer: C

QUESTION: No: 409

What is the volume of the following cylinder?

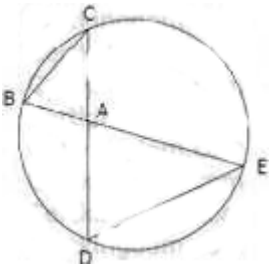


- A. 210.91
- B. 226.20
- C. 75.36
- D. 904.32
- E. 28.26

Answer: B

QUESTION: No: 410

In the above circle $AB = 4$, $BC = 6$, $AC = 5$ and $AD = 6$. What is the length of DE ?



- A. 6
- B. 7.5
- c. 8
- D. 9
- E. 10

Answer: D

QUESTION: No: 411

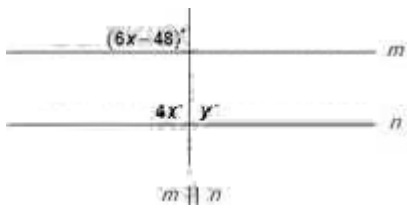
In the above circle, the radius is 6 and $AB = 6$. What is the area of the shaded region?

- A. $2\pi - 3\sqrt{3}$
- B. $4\pi - 4\sqrt{3}$
- C. $4\pi - 9\sqrt{3}$
- D. $6\pi - 6\sqrt{3}$
- E. $6\pi - 9\sqrt{3}$

- A. Option A
- B. Option B
- C. Option C
- D. Option D
- E. Option E

Answer: E

QUESTION: No: 412

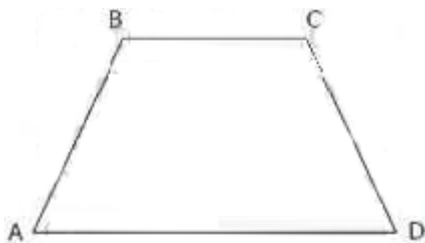


- A. 72
- B. 90
- C. 108
- D. 120
- E. 180

Answer: C

QUESTION: No: 413

What is the area of the trapezoid above if $AB = BC = CD = 6$, and $AD = 12$?



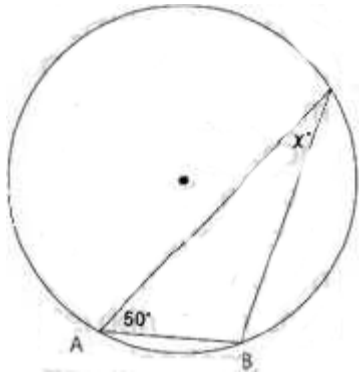
- A. $9\sqrt{2}$
- B. $9\sqrt{3}$
- C. $6\sqrt{6}$
- D. $18\sqrt{2}$
- E. $18\sqrt{3}$

- A. Option A
- B. Option B
- C. Option C
- D. Option D

Answer: B

QUESTION: No: 414

If the radius of the circle above is equal to the chord AB, then what is the value of?



- A. 25
- B. 30
- C. 40
- D. 45
- E. 50

Answer: B

Killexams.com is a leading online platform specializing in high-quality certification exam preparation. Offering a robust suite of tools, including MCQs, practice tests, and advanced test engines, Killexams.com empowers candidates to excel in their certification exams. Discover the key features that make Killexams.com the go-to choice for exam success.



Exam Questions:

Killexams.com provides exam questions that are experienced in test centers. These questions are updated regularly to ensure they are up-to-date and relevant to the latest exam syllabus. By studying these questions, candidates can familiarize themselves with the content and format of the real exam.

Exam MCQs:

Killexams.com offers exam MCQs in PDF format. These questions contain a comprehensive collection of questions and answers that cover the exam topics. By using these MCQs, candidate can enhance their knowledge and improve their chances of success in the certification exam.

Practice Test:

Killexams.com provides practice test through their desktop test engine and online test engine. These practice tests simulate the real exam environment and help candidates assess their readiness for the actual exam. The practice test cover a wide range of questions and enable candidates to identify their strengths and weaknesses.

Guaranteed Success:

Killexams.com offers a success guarantee with the exam MCQs. Killexams claim that by using this materials, candidates will pass their exams on the first attempt or they will get refund for the purchase price. This guarantee provides assurance and confidence to individuals preparing for certification exam.

Updated Contents:

Killexams.com regularly updates its question bank of MCQs to ensure that they are current and reflect the latest changes in the exam syllabus. This helps candidates stay up-to-date with the exam content and increases their chances of success.